



INDIAN SCHOOL AL WADI AL KABIR

DEPARTMENT OF MATHEMATICS (2026-2027)

PRE-MIDTERM EXAM REVISION WORKSHEET

RESOURCE PERSON: Ms. LUBNA HASAN

NAME: _____ CLASS: III SEC: _____ DATE: _____

Read the instructions and do as directed.

I. Read the questions carefully and circle the correct option.



- 1) The numeral for **Nine thousand two hundred seventy-six** is _____.
a) 9776 b) 9276 c) 9716 d) 9279
- 2) The **Successor** of 7999 is _____.
a) 9001 b) 8000 c) 7899 d) 8001
- 3) The **Place Value** of **7** in the number 8758 is _____.
a) 7 b) 70 c) 700 d) 7000
- 4) $6000 + 800 + 10 + 2 =$ _____.
a) 6822 b) 6802 c) 6800 d) 6812
- 5) $233 + 219 =$ _____ + 233
a) 219 b) 300 c) 299 d) 442
- 6) $0 + 9998 =$ _____ .
a) 0 b) 9998 c) 9987 d) 9999

II. Do as directed.

- 1) Arrange the given numbers in **ascending order**.

5580	5880	6789	4378

2) Form the **smallest and greatest** 4-digit numbers using all the digits below.



Smallest 4-digit Number	
Greatest 4-digit Number	

3) Write the **Expanded Form** of 8685.

8685 = _____ + _____ + _____ + _____

4) Identify the given numbers as **Odd or Even** and write them in the correct box



Odd Numbers	
Even Numbers	

5) Match the **number name** in Column A with the correct **numeral** in Column B.

Column A	Column B
1. Six thousand nine	a. 9809
2. Four thousand two hundred six	b. 6812
3. Six thousand eight hundred twelve	c. 6009
4. Nine thousand eight hundred nine	d. 4206

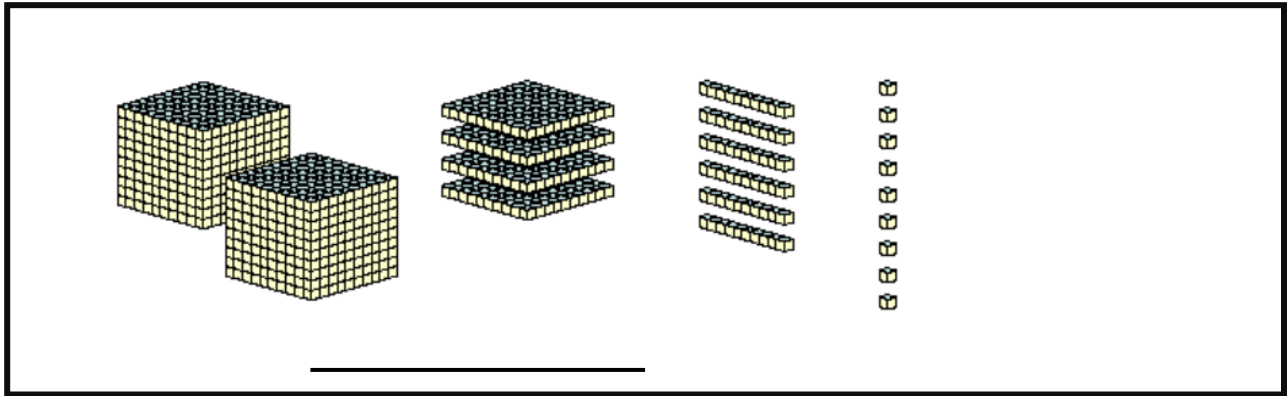
Ans: 1. ____ 2. ____ 3. ____ 4. ____

6) Fill in the blanks to complete the Number Pattern.

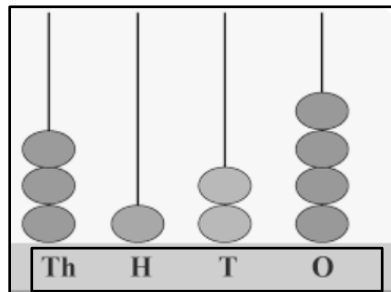
1) 1406, 1408, _____, _____

2) 3212, 3312, _____, _____

7) Identify the number formed by the picture of blocks shown below and write it in the space provided.



8) Identify the number formed by the picture of the abacus given below, and write the number name in the space provided.



9) Add the following.

A. Arrange and add.

a) $726 + 278$

	H	T	O
+			

b) $525 + 264$

	H	T	O
+			

B. Arrange and find the sum.

a) $4136 + 2751$

	TH	H	T	O
+				

b) $6477 + 2522$

	TH	H	T	O
+				

10) Solve the given word problems.

- a) **A truck carrying 151 oranges reaches the LuLu Mall in the morning. Another truck carrying 203 apples arrives in the evening. How many fruits were delivered to LuLu Mall altogether?**

	TH	H	T	O
Ans:				

- b) **Mahesh bought a chair for ₹1251 on Sunday and a table for ₹ 2340 on Monday. What amount did he spend in all?**

	TH	H	T	O
Ans:				